

Exercise No. 5

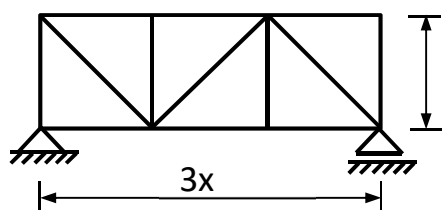
Planar trusses

Name _____
 Transcript number _____
 Academic year _____

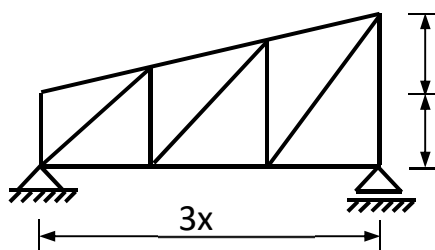
Date	Comments	Signature

For the truss No. ___ determine the forces in all members using the method of joints and the forces in four marked members using the method of sections.

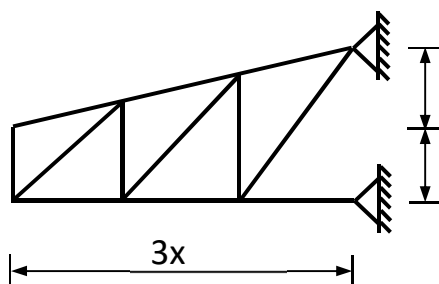
1



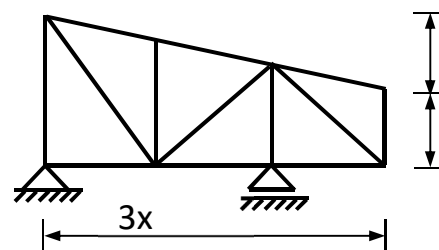
2



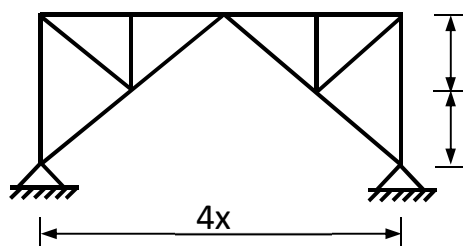
3



4



5



6

